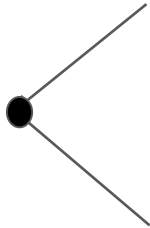
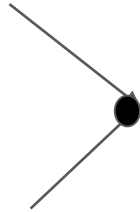




kleiner



groter




Bij dit spelletje moet de leerling kijken of het linker getal groter of kleiner is.


De leerling moet de knijper bij het juiste plaatje vastknijpen.

Groter of kleiner sommen.


45   ?   62




34   ?   32




59   ?   62




76   ?   77




54   ?   45




90   ?   89




74   ?   75




34   ?   28



32   ?   35




50   ?   60




A rectangular box containing a circle with the number 50 on the left, a square with a question mark in the center, and a circle with the number 60 on the right. Below the circles are two cartoon crocodiles, one on the left and one on the right.

40   ?   30




A rectangular box containing a circle with the number 40 on the left, a square with a question mark in the center, and a circle with the number 30 on the right. Below the circles are two cartoon crocodiles, one on the left and one on the right.

90   ?   100




A rectangular box containing a circle with the number 90 on the left, a square with a question mark in the center, and a circle with the number 100 on the right. Below the circles are two cartoon crocodiles, one on the left and one on the right.

70   ?   60




A rectangular box containing a circle with the number 70 on the left, a square with a question mark in the center, and a circle with the number 60 on the right. Below the circles are two cartoon crocodiles, one on the left and one on the right.

50   ?   40




A rectangular box containing a circle with the number 50 on the left, a square with a question mark in the center, and a circle with the number 40 on the right. Below the circles are two cartoon crocodiles, one on the left and one on the right.

90   ?   80




A rectangular box containing a circle with the number 90 on the left, a square with a question mark in the center, and a circle with the number 80 on the right. Below the circles are two cartoon crocodiles, one on the left and one on the right.

30   ?   20




A rectangular box containing a circle with the number 30 on the left, a square with a question mark in the center, and a circle with the number 20 on the right. Below the circles are two cartoon crocodiles, one on the left and one on the right.

20   ?   10



A rectangular box containing a circle with the number 20 on the left, a square with a question mark in the center, and a circle with the number 10 on the right. Below the circles are two cartoon crocodiles, one on the left and one on the right.

40   ?   20



A rectangular box containing a circle with the number 40 on the left, a square with a question mark in the center, and a circle with the number 20 on the right. Below the circles are two cartoon crocodiles, one on the left and one on the right.